


Subtraction Activity 1

Maximum Expected Time Completion: 15 minutes

Read the story and solve.


1. A girl has 5 pencils.



She gives 2 to her friend.




How many pencils are left?

 $5 - 2 = \underline{\quad}$

2. 8 birds are on a tree but 3 birds flew away.




How many birds are left on the tree?

 $8 - 3 = \underline{\quad}$


3. A kid has 7 marbles



The kid lost 4. How many marbles are left to the kid?


 $7 - 4 = \underline{\quad}$

4. My mom bought me and my sibling 7 bananas



We ate 4 of them.




 $7 - 4 = \underline{\quad}$

5. Dad has 16 pigeons.



8 of them flew away.

How many pigeons are left?

 $16 - 8 = \underline{\quad}$

6. My brother has 10 action figure toys.



If he gave away 4 of them, how many will be left to him?

7. There are 9 cars parked in a parking area.



6 of them left.

How many cars are left in the parking area?

8. You have 20 1-peso coins.



You bought a cup of Scramble worth P15.



How much money is left with you now?

9. There are 9 notebooks to be given away to students.



No student took any notebook.

How many notebooks are left?

10. There are 6 fishes in an aquarium.



Not counting the blue fish, how many fish are there in the aquarium?